

Class 1(Maths)

C.A.E.H.S(Primary sec),2020

Revision

Question Set 4

A) Fill in the blanks:-

1) $6 \times \underline{\quad} = 12$

2) $\underline{\quad} \times 4 = 16$

3) $5 \times 8 = \underline{\quad}$

4) $\underline{\quad} \times 9 = 63$

5) $7 \times \underline{\quad} = 49$

6) $\underline{\quad} \times 10 = 80$

7) $9 \times \underline{\quad} = 54$

8) $\underline{\quad} \times 3 = 21$

B) Show in terms of repeated addition and multiplication

1)



apples



apples

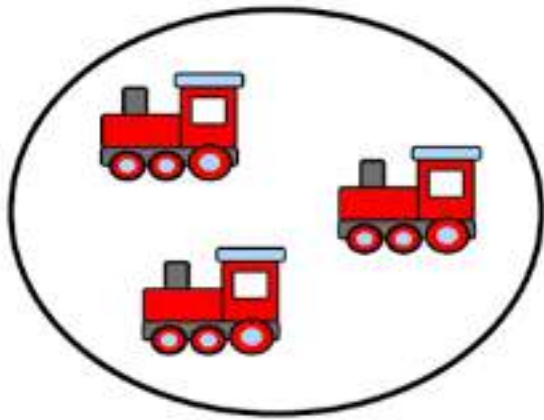
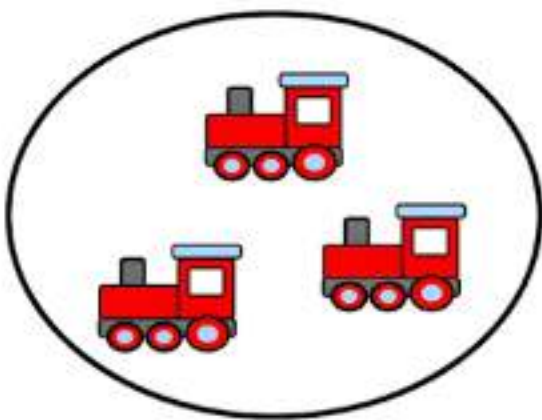


apples





apples

2)



3)



C) Multiply

$$\begin{array}{r} 1) \quad 10 \\ \quad 13 \\ \times \quad 3 \\ \hline \\ \hline \end{array}$$

Ans:

$$\begin{array}{r} 2) \quad 10 \\ \quad 24 \\ \times \quad 2 \\ \hline \\ \hline \end{array}$$

Ans:

$$\begin{array}{r} 3) \quad 10 \\ \quad 43 \\ \times \quad 4 \\ \hline \\ \hline \end{array}$$

Ans:

D) Fill in the blanks(Shapes)

- 1) A rectangle has _____ corners.
 - 2) An oval has _____ sides.
 - 3) A triangle has _____ sides.
 - 4) An eraser is an example of _____.
-

Name the shapes of the following:-

