


CLASS - III

PERIMETER AND AREA WORKSHEET

1 FIND THE PERIMETER OF THE FOLLOWING FIGURES

a



PQ = _____


QR = _____

RS = _____

SP = _____

Perimeter = _____

b



AB = _____

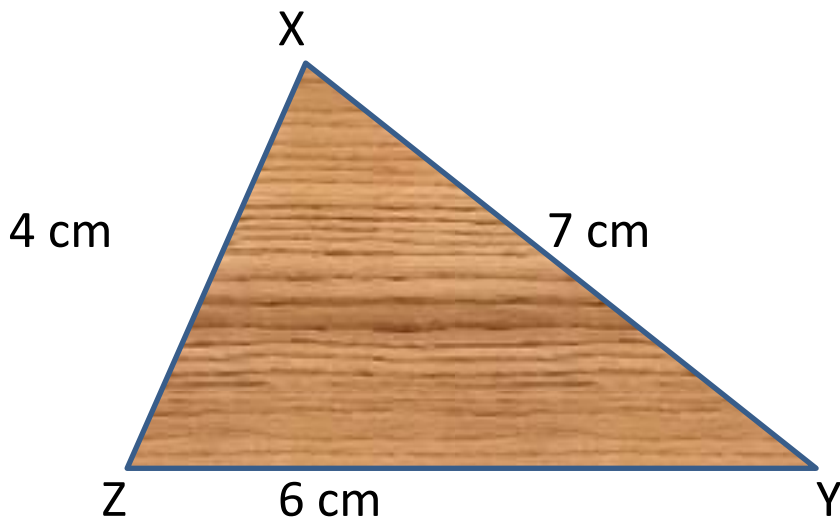
BC = _____

CD = _____

DA = _____


Perimeter = _____

c



Perimeter = _____

d



PQ = _____
QR = _____
RS = _____
ST = _____
TU = _____
UP = _____
Perimeter =

2 Find the area and perimeter of a rectangular cardboard having length 25 cm and breadth 11 cm.

3 Mr Sharma wants to put fence round his pool

- i Find the perimeter of the pool.
- ii Also find the area of the pool.

