

K.G(Maths)

C.A.E.H.S(Primary sec)

Lesson-Addition and Subtraction(File 12)

Worksheet 1

Count the circles. Write the numbers. Find the sum.

 +  _____ + _____ = _____

 +  _____ + _____ = _____

 +  _____ + _____ = _____

 +  _____ + _____ = _____

 +  _____ + _____ = _____

Worksheet 2(Addition)

Count, add and write the sum in the box

$$\begin{array}{|c|} \hline \text{2 Apples} \\ \hline \end{array} + \begin{array}{|c|} \hline \text{3 Apples} \\ \hline \end{array} = \begin{array}{|c|} \hline \\ \hline \end{array}$$

$$\begin{array}{|c|} \hline \text{2 Apples} \\ \hline \end{array} + \begin{array}{|c|} \hline \text{1 Apple} \\ \hline \end{array} = \begin{array}{|c|} \hline \\ \hline \end{array}$$

$$\begin{array}{|c|} \hline \text{1 Apple} \\ \hline \end{array} + \begin{array}{|c|} \hline \text{1 Apple} \\ \hline \end{array} = \begin{array}{|c|} \hline \\ \hline \end{array}$$

$$\begin{array}{|c|} \hline \text{2 Apples} \\ \hline \end{array} + \begin{array}{|c|} \hline \text{2 Apples} \\ \hline \end{array} = \begin{array}{|c|} \hline \\ \hline \end{array}$$

$$\begin{array}{|c|} \hline \text{4 Apples} \\ \hline \end{array} + \begin{array}{|c|} \hline \text{1 Apple} \\ \hline \end{array} = \begin{array}{|c|} \hline \\ \hline \end{array}$$

Worksheet 3(Addition)

Addition - Count the objects, write the numbers and find the sum (1-10)



+



=



+



=



+



=



+



=



+



=

Worksheet 4(Addition)

Addition (1-10)

$$\begin{array}{r} 7 \\ + 1 \\ \hline \end{array}$$



$$\begin{array}{r} 5 \\ + 3 \\ \hline \end{array}$$



$$\begin{array}{r} 4 \\ + 4 \\ \hline \end{array}$$



$$\begin{array}{r} 2 \\ + 6 \\ \hline \end{array}$$



$$\begin{array}{r} 2 \\ + 7 \\ \hline \end{array}$$





$$\begin{array}{r} 5 \\ + 4 \\ \hline \end{array}$$



$$\begin{array}{r} 6 \\ + 3 \\ \hline \end{array}$$



$$\begin{array}{r} 4 \\ + 2 \\ \hline \end{array}$$



Worksheet 5(Addition)

Addition (1-10)

$$\begin{array}{r} 2 \quad || \\ + 7 \quad ||||| \\ \hline \end{array}$$

$$\begin{array}{r} 5 \\ + 4 \\ \hline \end{array}$$

$$\begin{array}{r} 5 \\ + 2 \\ \hline \end{array}$$

$$\begin{array}{r} 4 \\ + 4 \\ \hline \end{array}$$

$$\begin{array}{r} 4 \\ + 6 \\ \hline \end{array}$$

$$\begin{array}{r} 3 \\ + 6 \\ \hline \end{array}$$

$$\begin{array}{r} 6 \\ + 1 \\ \hline \end{array}$$


$$\begin{array}{r} 3 \\ + 2 \\ \hline \end{array}$$

Do the worksheets and staple them in maths copy.
Maths Holiday H.W-Book Pg 87 to 95.

Worksheet 6(Subtraction)

Subtract the given numbers by crossing out the objects.


Example:




$$6 - 1 = 5$$




$$8 - 4 = \square$$



$$6 - 5 = \square$$



$$4 - 2 = \square$$



$$3 - 1 = \square$$



$$6 - 3 = \square$$

Worksheet 7(Subtraction)

Cross and subtract:-



Worksheet 8(Subtraction)

Subtraction (1-10)

$$\begin{array}{r} 7 \quad ||||\text{++} \\ - 3 \\ \hline \end{array}$$

$$\begin{array}{r} 9 \\ - 3 \\ \hline \end{array}$$

$$\begin{array}{r} 5 \\ - 4 \\ \hline \end{array}$$

$$\begin{array}{r} 8 \\ - 6 \\ \hline \end{array}$$

$$\begin{array}{r} 4 \\ - 1 \\ \hline \end{array}$$

$$\begin{array}{r} 8 \\ - 4 \\ \hline \end{array}$$

$$\begin{array}{r} 9 \\ - 5 \\ \hline \end{array}$$

$$\begin{array}{r} 6 \\ - 2 \\ \hline \end{array}$$

Do the worksheets and staple in maths copy.
Maths Holiday H.W-Book Pg 98 to 106.