

Class K.G(2020)
C.A.E.H.S(Primary sec)
File 7

Write the "Before numbers"(in maths copy)

1) 9 10

2) _____ 16

3) _____ 20

4) _____ 27

5) _____ 30

6) _____ 38

7) _____ 41

8) _____ 43

9) _____ 45

10) _____ 50

Sum no. 1 has been done for you.

Class K.G(2020)
C.A.E.H.S(Primary sec)
File 7

Write the "Between numbers"(in maths copy)

1) 9 10 11

2) 14 _____ 16

3) 18 _____ 20

4) 25 _____ 27

5) 29 _____ 31

6) 36 _____ 38

7) 40 _____ 42

8) 44 _____ 46

9) 42 _____ 44

10) 48 _____ 50

Sum no. 1 has been done for you.

Maths H.W(Maths book Pg 35,37,38,39)

Answers will be given in the next class

Class K.G(2020)
C.A.E.H.S(Primary sec)
File 7

Answers of before numbers

1) 9 10

2) 15 16

3) 19 20

4) 26 27

5) 29 30

6) 37 38

7) 40 41

8) 42 43

9) 44 45

10) 49 50

Class K.G(2020)
C.A.E.H.S(Primary sec)
File 7

Answers of between numbers

1) 9 10 11

2) 14 15 16

3) 18 19 20

4) 25 26 27

5) 29 30 31

6) 36 37 38

7) 40 41 42

8) 44 45 46

9) 42 43 44

10) 48 49 50

practice—Before, After, Between H.W

What comes before?

5

6

2

3

7

8

1

2

8

9

4

5

What comes after?

2

3

9

10

7

8

4

5

8

9

3

4

What comes between?

5

6

7

8

9

10

2

3

4

1

2

3

6

7

8

7

8

9

What comes before and after?

3

4

5

6

7

8

5

6

7

8


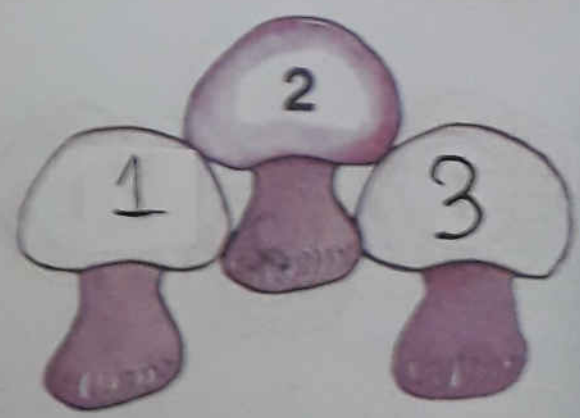

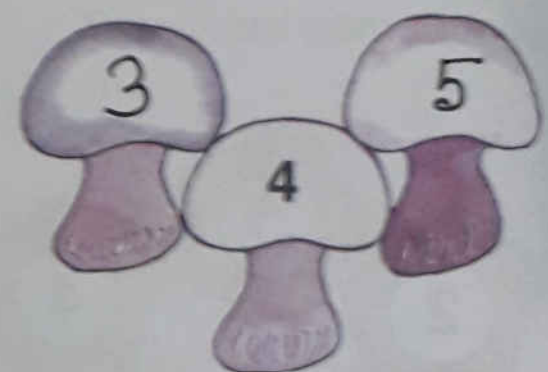
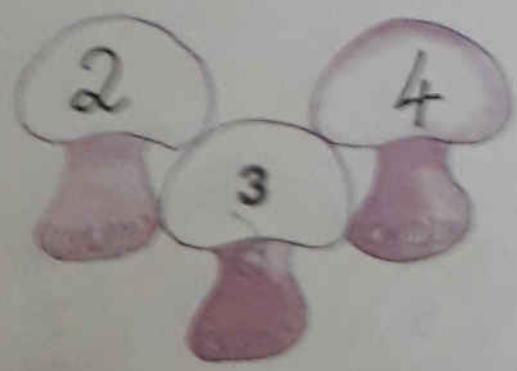
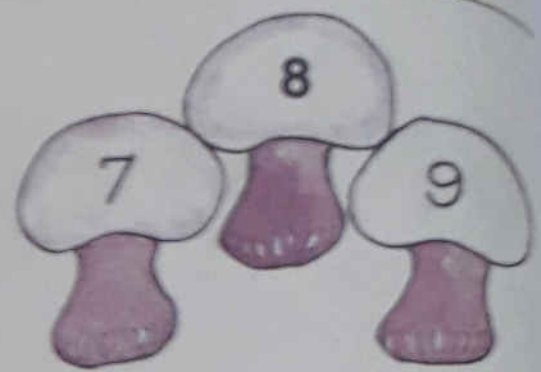
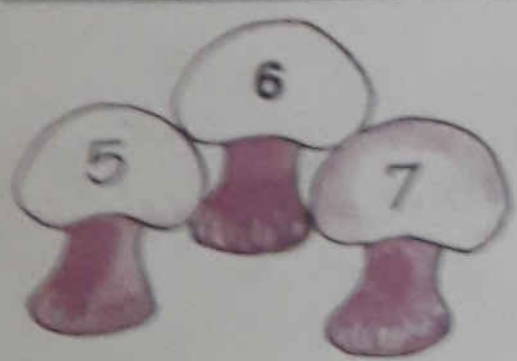
9

10





H.W

What comes before and after?


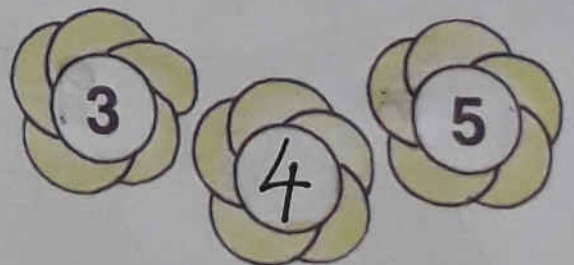
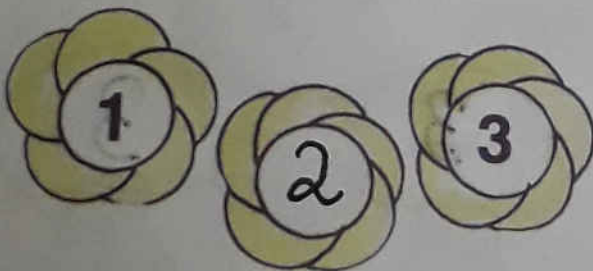



Between

H.W

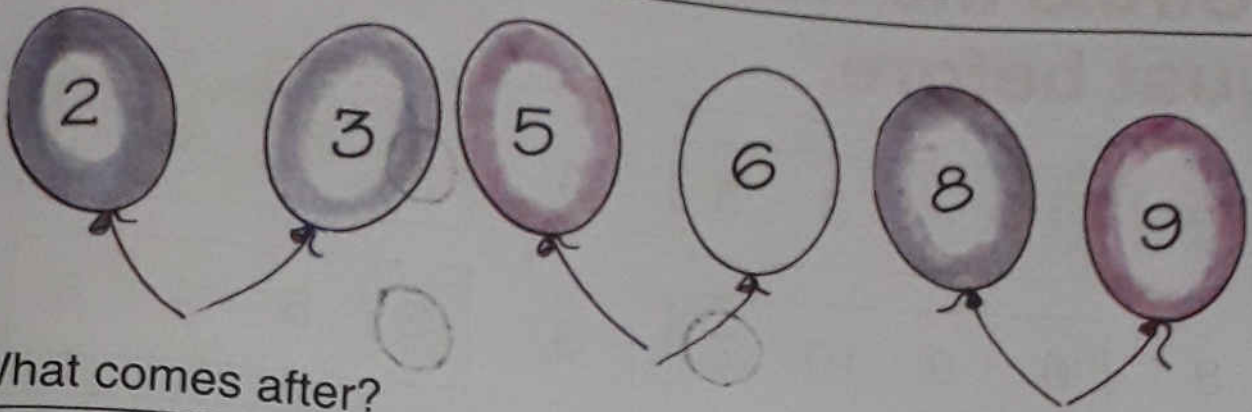


What comes between?



Before, After

H.W



What comes after?

1	<input type="text" value="2"/>	6	<input type="text" value="7"/>	8	<input type="text" value="9"/>
4	<input type="text" value="5"/>	5	<input type="text" value="6"/>	9	<input type="text" value="10"/>
8	<input type="text" value="9"/>	3	<input type="text" value="4"/>	2	<input type="text" value="3"/>
2	<input type="text" value="3"/>	9	<input type="text" value="10"/>	7	<input type="text" value="8"/>

What comes before?

<input type="text" value="1"/>	2	<input type="text" value="5"/>	6	<input type="text" value="4"/>	5
<input type="text" value="9"/>	10	<input type="text" value="2"/>	3	<input type="text" value="7"/>	8
<input type="text" value="4"/>	5	<input type="text" value="6"/>	7	<input type="text" value="1"/>	2
<input type="text" value="8"/>	9	<input type="text" value="3"/>	4	<input type="text" value="9"/>	10